

PHYSICS 200 MIDTERM # 2
----------------------------

Friday, Nov. 9th, 2007

Name: Mark Van Raamsdonk

Student Number: 58301912

Questions 1-7: short answer/multiple choice.

1 point each. Write answers in boxes here →


Questions 8-10: SHOW YOUR WORK

9 points total

16 total points available

ANSWERS:

#1	C
#2	E
#3	C
#4	D
#5	D
#6	D
#7	BCE

 write  
 ALL  
 that apply  
 for these  
 ones
 

Formula sheet at the back (may be removed)

- ① A massless particle has energy 13 MeV. What is its velocity?  
All massless particles must have velocity  $c$  to have nonzero energy

Answer:  $c$

②



A metal surface is illuminated with light whose wavelength is short enough to produce photoelectrons.

If we now switch to light with half the wavelength but keep the total power of the beam the same, what happens to the maximum kinetic energy of the electrons?

initially:

$$E_k^{\max} = \frac{hc}{\lambda} - W$$

after:

$$\tilde{E}_k^{\max} = \frac{2hc}{\lambda} - W$$

$$\frac{\tilde{E}_k^{\max}}{E_k^{\max}} = \frac{2 - \frac{W\lambda}{hc}}{1 - \frac{W\lambda}{hc}} > 2$$

- a) It stays the same
- b) It doubles (increases by 100%)
- c) It increases, but by less than 100%
- d) It is cut in half
- e) It increases by more than 100%

- ③ An  $\alpha$  particle is a bound state of two protons and two neutrons. The mass of an  $\alpha$  particle is

a) greater than  $2m_p + 2m_n$

b) equal to  $2m_p + 2m_n$

c) less than  $2m_p + 2m_n$

d) any of the above, depending on its velocity

Since the  $\alpha$  particle is a bound state, it would require adding energy to the system to separate the  $\alpha$  into protons & neutrons. So the total energy of the  $\alpha$  at rest is less than the total energy of the 2 protons & 2 neutrons at rest.



The picture on the right above represents the photons making up an electromagnetic wave. Which of the pictures below best represents the photons making up a wave with the same amplitude and half the wavelength? smaller wavelength = greater energy per photon



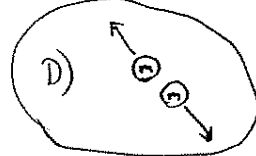
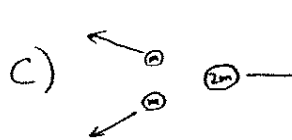
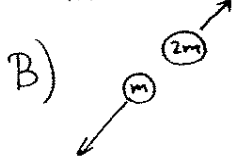
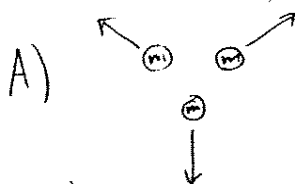
same amplitude = same energy density ∴ smaller density of photons



NOTE: size represents energy in the pictures to the right


⑤ A nucleus of mass  $3m$  decays into smaller nuclei. Which of the following represent(s) a possible final state? GIVE ALL ANSWERS THAT APPLY

Mass  $3m = \text{TOTAL ENERGY OF INITIAL NUCLEUS AT REST}$

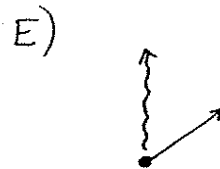
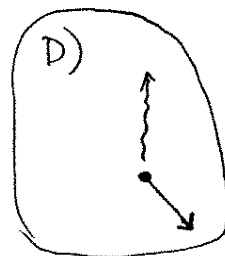

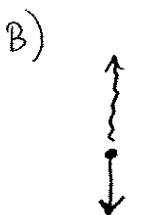




∴ All have greater energy than the original nucleus at rest except D.

⑥ A photon scatters off an initially stationary electron. Which of the following represent(s) a possible final state? GIVE ALL ANSWERS THAT APPLY




\*MOMENTUM IS A VECTOR\*  
∴ all components conserved.



Need momentum to be conserved, so final state must have 0 momentum in  $\hat{y}$  direction, +ve momentum in  $\hat{x}$  direction. Only D is possible.

7



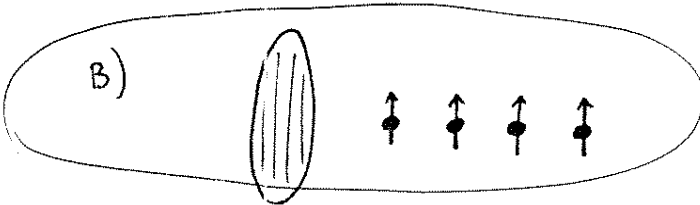
Four equally spaced photons polarized at  $45^\circ$  to the vertical are incident upon a vertically oriented polarizer, as shown. Which

of the following pictures represents a possible outcome of this experiment?

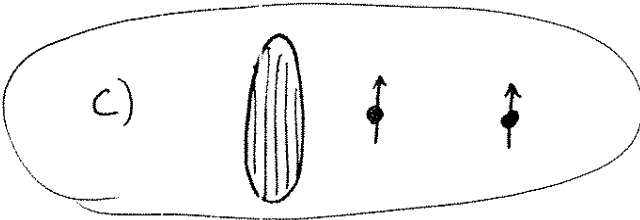
A)



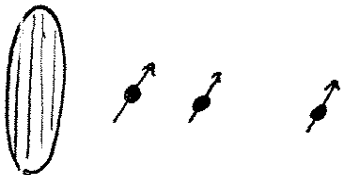
B)



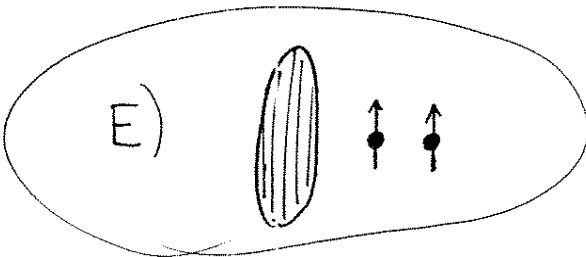
C)



D)



E)



GIVE ALL ANSWERS  
THAT APPLY.

Photons must be polarized vertically after passing through polarizer, but B, C, and E are all okay, since each photon has some probability of passing through.

(note: E represents a case where the 1st 2 photons are absorbed & the last 2 are transmitted, while in C, the 2nd and 4th photons are transmitted)

8) A particle of mass  $140 \text{ MeV}/c^2$  decays into 2 photons. If the particle was initially at rest, what are the wavelengths of the photons? (2 points)

BEFORE:



AFTER:  $E = |\vec{p}|c$

The diagram shows two wavy lines representing photons moving in opposite directions. The rightward-moving photon has a momentum vector  $\vec{p}$  and energy  $E = |\vec{p}|c$ .

By momentum conservation, the momenta of the two photons must be of the same magnitude but in opposite directions. They therefore have the same energy, which must be half the energy of the original particle. Thus, we have:

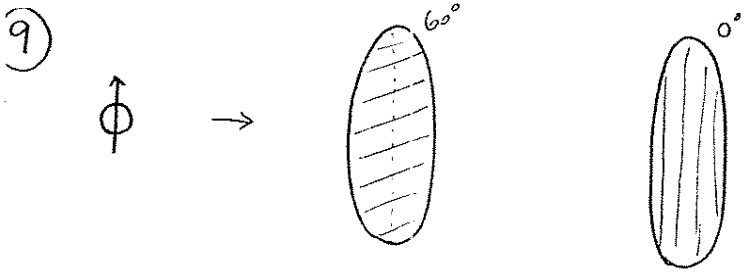
$$E_{\text{photon}} = \frac{1}{2} M c^2$$

$$\Rightarrow \frac{hc}{\lambda_{\text{photon}}} = \frac{1}{2} M c^2$$

$$\Rightarrow \lambda_{\text{photon}} = \frac{2h}{Mc}$$

$$= \frac{2 \times 6.6 \times 10^{-34} \text{ J}\cdot\text{s}}{3 \times 10^8 \text{ m/s} \times \frac{140 \text{ MeV}}{(3 \times 10^8 \text{ m/s})^2} \times 1.6 \times 10^{-13} \text{ J/MeV}}$$

$$\approx 1.77 \times 10^{-14} \text{ m}$$



A vertically polarized photon is incident on a polarizer oriented at  $60^\circ$  to the vertical, followed by a polarizer oriented

vertically. What is the probability that the photon will pass through both polarizers? (3 points)

$$\begin{aligned} \text{Prob of passing through 1st one} &= \cos^2(60^\circ) \\ &= \frac{1}{4} \end{aligned}$$

After this, the photon is ~~oriented~~ polarized at  $60^\circ$ , so the prob of such a photon passing through the 2nd polarizer is also  $\frac{1}{4}$ . The total probability is

$$P = \frac{1}{4} \times \frac{1}{4} = \frac{1}{16}$$

(i.e. one in four pass through the first, and one in four of the ones passing through the first pass through the second, so one in ~~14~~ 16 pass through both).

10)



A plain donut of mass  $M$  is travelling in the  $+\hat{x}$  direction at velocity  $\frac{3}{5}c$  while a chocolate donut is travelling in the  $-\hat{x}$  direction with speed  $\frac{4}{5}c$ .

a) What is the momentum of the chocolate donut in the frame of the plain donut? (3 points)

Original frame:

$$\begin{aligned} p_{\text{choc}} &= \gamma m u \\ &= \frac{5}{3} \cdot M \cdot \left(-\frac{4}{5}c\right) \\ &= -\frac{4}{3} M c \end{aligned}$$

$$\begin{aligned} E_{\text{choc}} &= \gamma m c^2 \\ &= \frac{5}{3} M c^2 \end{aligned}$$

Alternate soln:

we can calculate  $u'$  using velocity transform, then

$$\begin{aligned} p'_{\text{choc}} &= \gamma_{u'} M u' \\ &= \frac{37}{12} \cdot M \cdot \left(-\frac{35}{37}c\right) \\ &= -\frac{35}{12} M c \end{aligned}$$

Frame of plain donut:

$$p' = \gamma \left( p - \frac{v}{c^2} E \right)$$

$$= \frac{5}{4} \left( -\frac{4}{3} M c - \frac{3}{5} \cdot \frac{5}{3} M c \right)$$

$$\Rightarrow \boxed{p' = -\frac{35}{12} M c} \approx -2.92 M c$$


these are for the velocity of the new frame in the old frame i.e.

$$v = \frac{3}{5}c$$

$$\gamma = \frac{4}{3}$$

- b) If the two donuts collide inelastically and stick together, what is the mass of the resulting object? (1 point)  
 (NOTE: this question isn't worth much for the amount of work required, so it's best to do everything else first).

AFTER:



By energy conservation,

$$\begin{aligned} E_f &= \bar{E}_{\text{plain}} + E_{\text{choc}} \\ &= \frac{5}{4} M c^2 + \frac{5}{3} M c^2 \\ &= \frac{35}{12} M c^2 \end{aligned}$$

By momentum conservation

$$\begin{aligned} P_f &= P_{\text{plain}} + P_{\text{choc}} \\ &= \gamma_p m v_p + \gamma_c m v_c \\ &= \frac{3}{4} M c - \frac{4}{3} M c \\ &= -\frac{7}{12} M c \end{aligned}$$

Now we can use  $E_f^2 = p_f^2 c^2 + m_f^2 c^4$

$$\begin{aligned} \Rightarrow m_f &= \sqrt{\left(\frac{E_f}{c^2}\right)^2 - \left(\frac{P_f}{c}\right)^2} \\ &= M \sqrt{\left(\frac{35}{12}\right)^2 - \left(\frac{7}{12}\right)^2} = \frac{7\sqrt{6}}{6} M = 2.86 M \end{aligned}$$

Alternate soln:

- we can find the velocity of the frame where the total mom. is 0 via

$$0 = \gamma \left( P_f - \frac{v}{c^2} E_f \right)$$

$$\Rightarrow v = \frac{P_f c^2}{E_f} = -\frac{1}{5} c$$

This is the final velocity of the object in the original frame, so

$$E_f = \frac{35}{12} M c^2 = \gamma_{(-1/5c)} \cdot M_f c^2$$

$$\Rightarrow M_f = M \cdot \frac{35}{12 \cdot \gamma_{(-1/5c)}}$$